



KENYA SCHOOL.

HOMWORK ACTIVITY



NAME: _____

NAME _____ DATE: _____

1. What is the colour of the sky during the day?

(Dark, blue) _____ (1mk)

2. We play kites when it is _____

(Sunny, windy) (1mk)

3. Name two weather conditions when we can
we can use the object (2mks)

_____ and _____




4. Rain and dams are _____ of water.

(uses, sources) (1mk)

5. Plants needs _____ to grow. (1mk)

6. Name and colour 2 sources of water. (6mks)



7. Circle the soil which becomes sticky when mixed with water. (1mk)

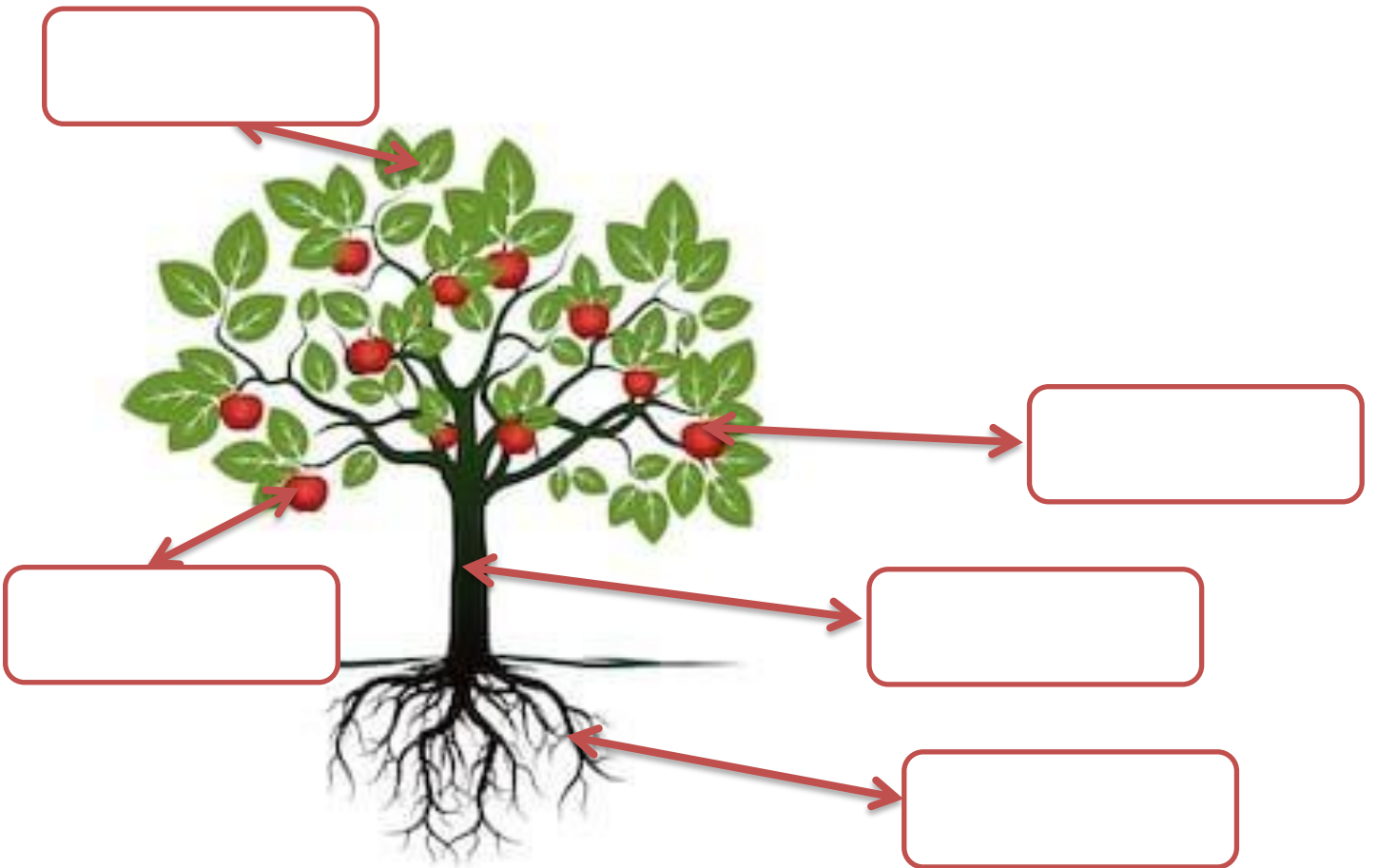
Sand loam clay

8. Name 3 things you need to plant maize seed. (3mks)

a) _____ b) _____

c) _____

9. Name the parts of a plant. (4mks)



10. Very many trees makes a _____

(1mk) forest, home).

11. _____ gives us honey. (1mk) (Bees, cow)

12. A cow gives _____ and _____ (1mk)

13. Write whether it is a good or bad healthy habit.

(4mks)

a) Bathing daily _____

b) Using a lot of sugar _____

c) Drinking safe water _____

d) Resting after work _____

e) Doing exercises _____

14. Fruits should be _____ before eating.

(1mk)

15. After shedding a tooth, you should gargle _____

Water. (sugary, salty) (1mk)

16. Milk teeth are _____ (1mk)

(Permanent, temporary)

17. Draw and colour types of medicines

Capsule	tablets	Ointments cream	inhaler

17. Draw and colour materials used to clean the body. (6mks)

Toothbrush	Soap	Pumice stone

C.R.E ACTIVITIES

1. God created me in His own _____
and _____ (1mk)

2. We take care of our teeth by _____
(cutting, brushing) (1mk)

3. Draw and colour two things created by God. (2mks)

sun	trees

4. What is prayer? (1mk)

5. Family members _____ together.
(share, hate) (1mk)

6. Sharing work brings _____ (1mk)
Hatred, unity)

7.The bible has _____ books. (1mk)

(39, 66)

8.This is a _____ (1mk)



9.Goliath was killed by David with a sling and a _____.

10. Joseph had _____ brothers (12,11)

(1mk)

IRE ACTIVITIES

1. Muslims worship in a _____

(Mosque, Temple) (1mk)

2. Name 3 things that Allah created. (1mk)

a) _____

b) _____

c) _____

3. Write the number of Rakaa (1mk)

a) Dhuhur

b) Fajr

4. We see things with our _____

(mouth, eyes) (1mk)

5. We say _____ after drinking.

(Bismillah, Alhamdulillah) (1mk)

6. We wash _____ after the toilet.

(hands, legs) (1mk)

7. We worship _____

Allah, Muhammed) (1mk)

8. _____ pray has two rakat.

(Fajr, dhuhur) (1mk)

9. We pray _____ times a day.

(5,6) (1mk)

10. Allthat Allah created is _____

(bad, good) (1mk)

ASSESSMENT RUBRICS

	EXCEEDING EXPECTATIONS	MEETING EXPECTATION	APPROACHING EXPECTATION	BELOW EXPECTATIONS
	45-50	35-44	25-34	0-24

FRENCH ACTIVITIES.

1. Write these sounds in French.

Aa _____

Kk _____

Pp _____

Hh _____

Zz _____

2. Underline five French speaking countries from those listed below.

Kenya

Somalia

Burundi

Rwanda

Tanzania

USA

Cameroon

Belgium

Chad

3(i). Fill in the missing letters of these greetings.

a. B _nj_ _r.

b. Sal _t!

c. _onsoi_.

d. B _n ap _rès midi?

d. Bo _nu _t!

(ii) Write down the meanings of the above greetings in English.

a. _____

b. _____

c. _____

d. _____

e. _____

**COMPETENCE BASED CURRICULUM
SHUGHULI ZA KISWAHILI**

G1

1. Jaza silabi (ala.3)

a) Ba _____ bo _____

b) dha _____ dhu _____

c) ya _____ yi _____ yu _____

2. Tenganisha silabi kutoka kwa neno (ala. 3)

a) Pete = ----- +

b) dhahabu = + +

c) chaki = +

3. Andika kwa herufi ndogo au kumbwa (ala. 3)

a) CHUNGU

b) Kikombe

c) KIJIKO

4. Soma na uchore (ala.3)

Kiti	chungu	upanga

5. Tia mstari maneno yenye sauti 'm' (ala. 7)

Mama, lala, kumi, meza, sisi, mtoto, pita,

Simu, paka, pera, moto, lia, kula, simama, kinu

6. Andika jina la picha.



shutterstock.com • 636654925



7. Andika vizuri (ala. 4)

- a) leshu.....
- b) tiki
- c) bukita.....
- d) musi.....

8. Jaza pengo (ala 4)

Ch__ng__

m__z__

K__s__

k__l__mu

9. Andika kwa wingi (ala 6)

Umoja

Wingi

a) Mwanafunzi

.....

b) Mtoto

.....

c) Kitabu

.....

d) Kinu

.....

e) Mzazi

.....

f) Mkulima

.....

10. Andika nambari kwa majina (ala. 4)

a) 5

b) 2

c) 8.....

d) 7

VIWANGO VYA KUTATHIMINI

Kuzidisha matarajio	Kufikia matarajio	Kukaribia matarajio	Mbali na matarajio
45-50	35-44	25-34	0-24

KUSOMA NA KUANDIKA GREDI YA KWANZA

Tunga sentensi ukitumia maneno yafuatayo. (ala. 10)

1. Mtoto

2. Msichana

3. Kitabu

4. Kijiko

5. Mvulana

Soma hadithi kisha ujibu maswali yafuatayo. (ala. 7)

Siku ya jumamosi Akelo na Maria walienda kutembea jiji la Nairobi. Waliona magari mengi na manyumba marefu. Pia waliona gari la moshi. Walifurahia sana.

6. _____ na _____ walienda kutembea.

7. Walitembea siku gani? _____

8. Walitembela muji upi? _____

9. Waliona vitu gani?

a) _____

b) _____

c) _____

10. Kamilisha sentensi hizi. (ala. 3)

a) Ukipewa kitu unasema _____

(ndio, asante)

b) Ukiomba kitu utasema _____

(nipe, tafadhali)

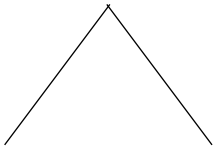
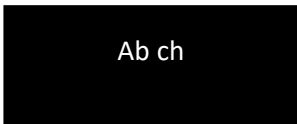
c) Ukimkosea mtu unasema _____


(pole, sawa)


11. Andika jina la picha kisha upake rangi (ala.12)

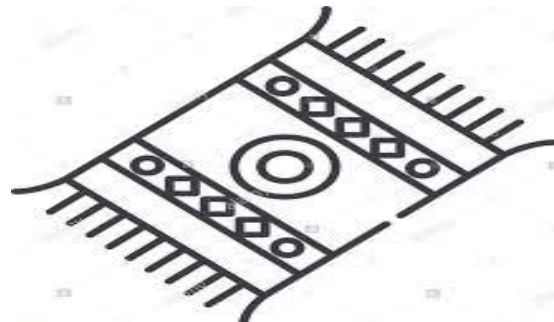


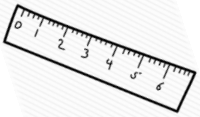
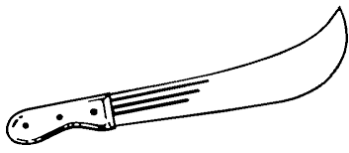

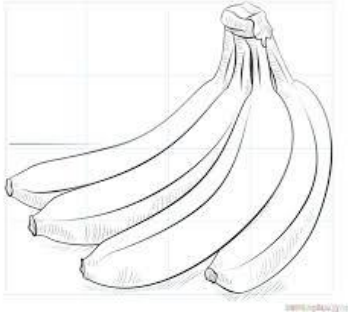













12. Chagua jibu sahihi kukamilisha sentensi(ala8)



a) Huyu ni _____

b) Ana miguu _____

(mine, miwili)

c) Ana macho _____

(moja, mawili)

d) Mwili wake umefunikwa na _____

(manyoya, mabawa)

e) Yeye hutumia _____ kuruka hewani (mabawa, miguu)

f) Ni mnyama wa _____

(msituni, nyumbani)

g) Chakula ni nafaka, majini na _____

(nyama, wadudu)

h) Watoto wake ni _____

(Vifaranga, Ndama)

i) Ana mdomo _____

(miwili, mmoja)

VIWANGO VYA UTHIMINI

Kuzidisha Matarajio	Kufikia matarajio	Kukaribia matarajio	Mbali na matarajio
45 - 50	35 - 44	25 - 34	0 - 24

COMPETENCE BASED CURRICULUM

ENGLISH SECTION B

LITERACY

G1

1. Write five sentences using 'I am'

- a) _____ .
- b) _____ .
- c) _____ .
- d) _____ .
- e) _____ .

2. Make sentences using the following words;

- a) Boy
- b) School
- c) Cup
- d) Pencil
- e) Uncle

3. Name the pictures below

4. Read the following passage

Early one morning, a hunter took his huge net and went to the forest. He spread his net under a big tree. "Many birds come to this tree everyday, I am sure I will get a good catch today," said the hunter.

COMPETENCE BASED CURRICULUM

CREATIVE ARTS

1. Name 4 different types of songs performed for different purposes in your community. The first answer is given.

a) Wedding songs.

b)

c)

d)

e)

2. Write the first verse of the Kenya National Anthem in English.

.....
.....
.....
.....

3. Write the first verse of the Kenya National Anthem in Kiswahili.

.....
.....
.....
.....

4. When do we sing the National Anthem in our school?

a.

b.

5. Write the first verse and the chorus of the East African Anthem.

.....

.....

.....

.....

.....

.....

.....

.....

6. How do we stand when singing the National and East African Anthems?

.....

.....

7. What does the Kenya National Anthem talk about?

.....

.....

.....

8. What is the message given by a lullaby song?

.....

.....

.....

9. Write 4 activities in your community when you sing.

.....
.....
.....
.....

10. Give three reasons why we sing.

.....
.....
.....

11. Write 4 communities that you know where we can learn different type of songs.

- i.
- ii.
- iii.
- iv.

12. Write four activities that we do when singing. The first answer is given.

- a) Clapping.
- b)
- c)
- d)

e)

13. Write 4 instruments that we can use to accompany our singing. The first answer is given.

i. A hand drum.

ii.

iii.

iv.

v.

14. Which language is our school anthem written in?

.....

15. A drum produce sound through beating. Write down how the following instruments produce sound.

i. A kayamba

ii. A shaker.

iii. A jingle

iv. A tambourine.


16. Write 3 sources of sound found in your home.

i)


ii)

iii)

17. Colour the parts of a plant.



18. This is a _____ line.



19. This is a line.



20. This is a line (curved, wavy; straight)



20. Complete the pattern

a. Q = Q = Q = Q = _____



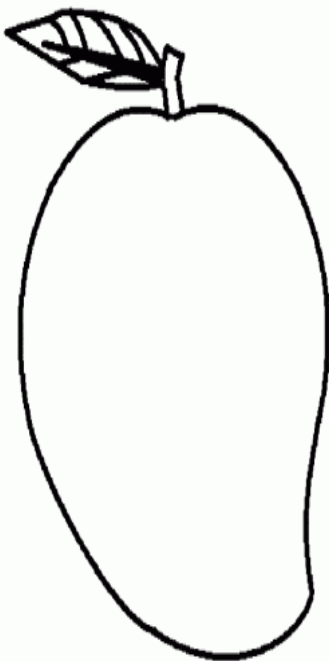
c. X = X = X _____

b. USUSUS _____

21. Draw and colour

car	cat	house

22. Colour the fruits we eat



Fill in the missing sounds

1. R _____ ler

2. B _____ ll

3. F _____ ther

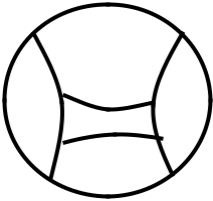
4. M _____ ther

5. Fl _____ g


Name the

pictures


6.



7.

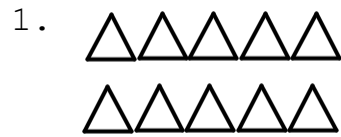


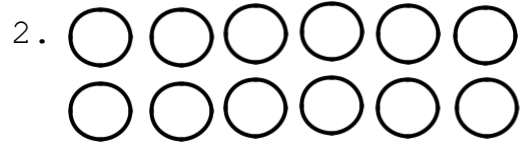
8.



MATHEMATICS

Count and write







Add

4.2 + 6 = _____

5.3 + 4 = _____

6.5 + 1 = _____

7.7 + 0 = _____

Write in words

8. 3 _____

9. 9 _____

10. 8 _____

Write the next number

11. 16, 17, 18, _____

12. 31, 32, 33, _____

13. 23, 24, 25, _____

14.

7
-
6

15.

8
-
3

16.

9
-
2

Place value











17. 41 = _____ tens and _____ ones

18. 64 = _____ tens and _____ ones


19. 30 = _____ tens and _____ ones


20. 19 = _____ tens and _____ ones
 = _____ and _____ 5


Match the similar objects

21.		
22.		
23.		
24.		
25.		

Name the shapes (star, circle, rectangle, oval, triangle)

26. 

28. 

27. 

29. 

30. 