



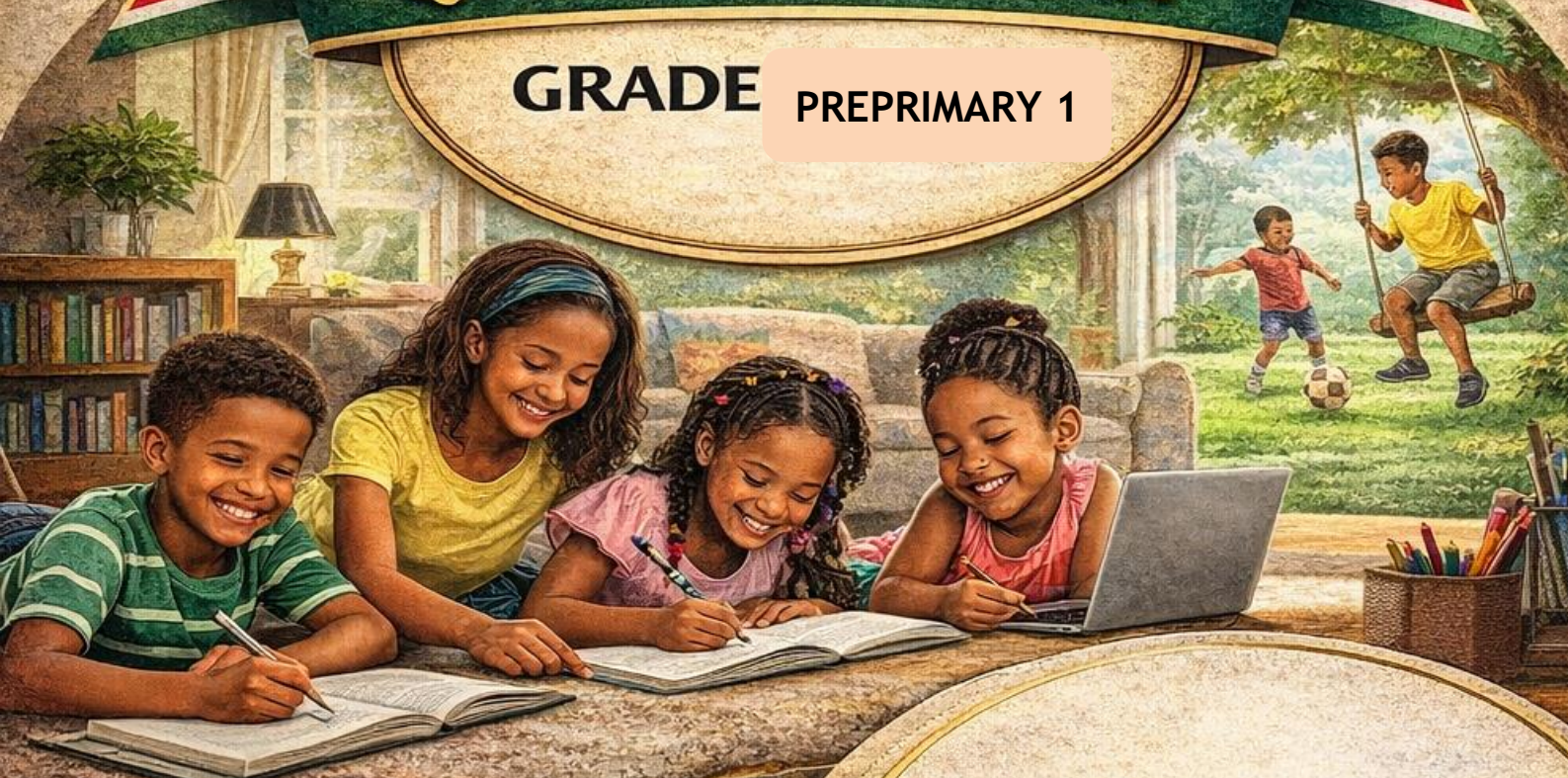
COMPETENCE-BASED EDUCATION CBE

KENYA EARLY YEAR EDUCATION ASSESSMENT

APRIL HOLIDAY ASSIGNMENT 2026

QUESTION BOOKLET

GRADE PREPRIMARY 1



- MATHEMATICS
- ENGLISH
- KISWAHILI
- IRE
- CRE
- ENVIRONMENTAL
- CREATIVE ARTS

LEARNERS NAME: _____

SCHOOL: _____



AUTHORS: COMPETENCE KENYA EDUCATION GROUP

Empowering Kenya's Young Learners with Excellence!

NAME: _____ ASSESSMENT NUMBER: _____

SCHOOL: _____ DATE: _____

Exceeding Expectation	Meeting Expectation	Approaching Expectation	Below Expectation	Total Score (%)

MATHEMATICS ACTIVITIES
TIME: 2 HOURS

1. Write numbers 21 to 30 (10 mks)

2. Draw values (8 mks)

- a) 8 _____
- b) 9 _____
- c) 11 _____
- d) 5 _____

3. Write the number words (8 mks)

- a) 0 _____
- b) 1 _____
- c) 2 _____
- d) 3 _____

4. Re-write the names of the shapes (1 mks)



5. Add (1 mk)



5. Put together (12 mks)

- a) $6 + 2 =$ _____
- b) $2 + 8 =$ _____
- c) $3 + 1 + 0 =$ _____

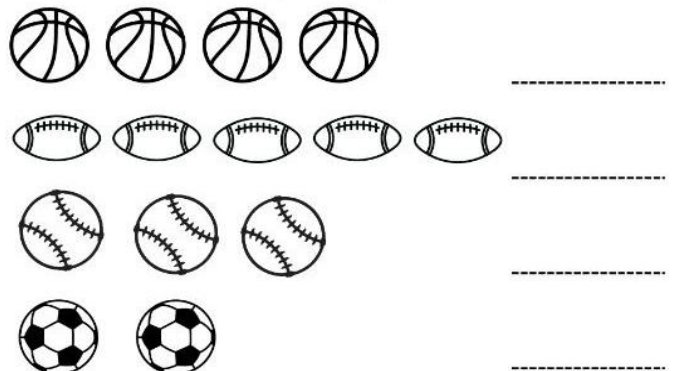
d) $1 + 2 + 4 =$

e) $\begin{array}{r} 2 \\ + 1 \\ \hline 3 \end{array}$	f) $\begin{array}{r} 3 \\ + 7 \\ \hline 0 \end{array}$
--	--

6. Fill in the missing numbers. (8mks)

- 1, 2, _____, 4, _____, 6
- 12, 13, _____, 15, 16, _____
- _____, _____, 11, 12, 13
- 6, _____, _____, 9, 10

7. Count and write (2 mks)



NAME: _____ ASSESSMENT NUMBER: _____

SCHOOL: _____ DATE: _____

Exceeding Expectation	Meeting Expectation	Approaching Expectation	Below Expectation	Total Score (%)

LANGUAGE ACTIVITIES

TIME: 2 HOURS

1. Dictation (12 mks)

- | | |
|----------|----------|
| a) _____ | g) _____ |
| b) _____ | h) _____ |
| c) _____ | i) _____ |
| d) _____ | j) _____ |
| e) _____ | k) _____ |
| f) _____ | l) _____ |

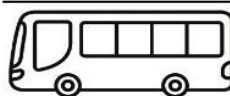
2. Join and read (6mks)

- | | |
|-----------|-------|
| a) ha + t | _____ |
| b) pa + n | _____ |
| c) be + g | _____ |
| d) me + t | _____ |
| e) fi + n | _____ |
| f) hu + t | _____ |



3. Put the last sounds (12mks)

- | | |
|-------------|-------------|
| a) ma _____ | g) wi _____ |
| b) ga _____ | h) ti _____ |
| c) ba _____ | i) ki _____ |
| d) pe _____ | j) do _____ |
| e) de _____ | k) ho _____ |
| f) ye _____ | kl lo _____ |

4. Name the pictures (12 mks)



5. Read and draw (8 mks)



NAME: _____ ASSESSMENT NUMBER: _____

SCHOOL: _____ DATE: _____

Exceeding Expectation	Meeting Expectation	Approaching Expectation	Below Expectation	Total Score (%)

LITERACY ACTIVITIES

TIME: 2 HOURS

LISTENING AND SPEAKING

- 1.) What is your name? (1mk) _____ (learner responds)
- 2.) How old are you? (1 mk) _____ (learner responds)
- 3.) What class are you in? (1 mk) _____ (learner responds)
- 4.) What is the name of your teacher? (1 mk) _____ (learner responds)
- 5.) Are you a boy or a girl ? (1 mk) _____ (learner responds)

READING

1. Read the sounds (5mks)

a n e g i h o s u t
y b r z q k m p x n

2. Read the below pictures (20 mks)



4. Read the sentences (30mks)

- a) The pan had mud on it
- b) That ham is bad
- c) Dan had a hot bun
- d) A cat is on the mat
- e) Let the red hen go
- e) The log is wet
- f) Sam set the tap
- g) That is a fat pig
- h) Dan had a hot bun
- i) A peg is in the tin
- j) The pot has a dot
- k) Six kids can fix the pen

NAME: _____ ASSESSMENT NUMBER: _____

SCHOOL: _____ DATE: _____

Exceeding Expectation	Meeting Expectation	Approaching Expectation	Below Expectation	Total Score (%)

ENVIRONMENTAL ACTIVITIES
TIME: 2 HOURS

ENVIRONMENTAL ACTIVITIES

1. Answer correctly (7 mks)

a) We brush our teeth using (toothpaste, flour)

.....

b) We wash our after using the toilet
(hands, legs)



c) This is called an


d) Name two fruits we eat

.....

e) Name two domestic animals

.....

2. Circle the correct name for the vegetables (5 mks)




(apple, carrot)



(peas, onion)



(spinach , cabbage)




(eggplant, mango)



(tomato, potato)



3. Colour correctly (3mks)



4. Name the pictures (4 mks)

(clouds, rain, star, sun)






RELIGIOUS EDUCATION

1. Circle the correct name for the pictures (4 mks)



(church, house)



(home, mosque)



(cross, stick)




(bible, quran)

2. Read and draw God's creation (2 mks)



moon



fish

NAME: _____ ASSESSMENT NUMBER: _____


SCHOOL: _____ DATE: _____

Exceeding Expectation	Meeting Expectation	Approaching Expectation	Below Expectation	Total Score (%)

PSYCHOMOTOR AND CREATIVE ACTIVITIES
TIME: 2 HOURS

Color by Number

Use the key at the bottom of the page to color the picture. (2mks per colour)



1 - grey 2 - yellow 3 - blue 4 - red 5 - orange

