



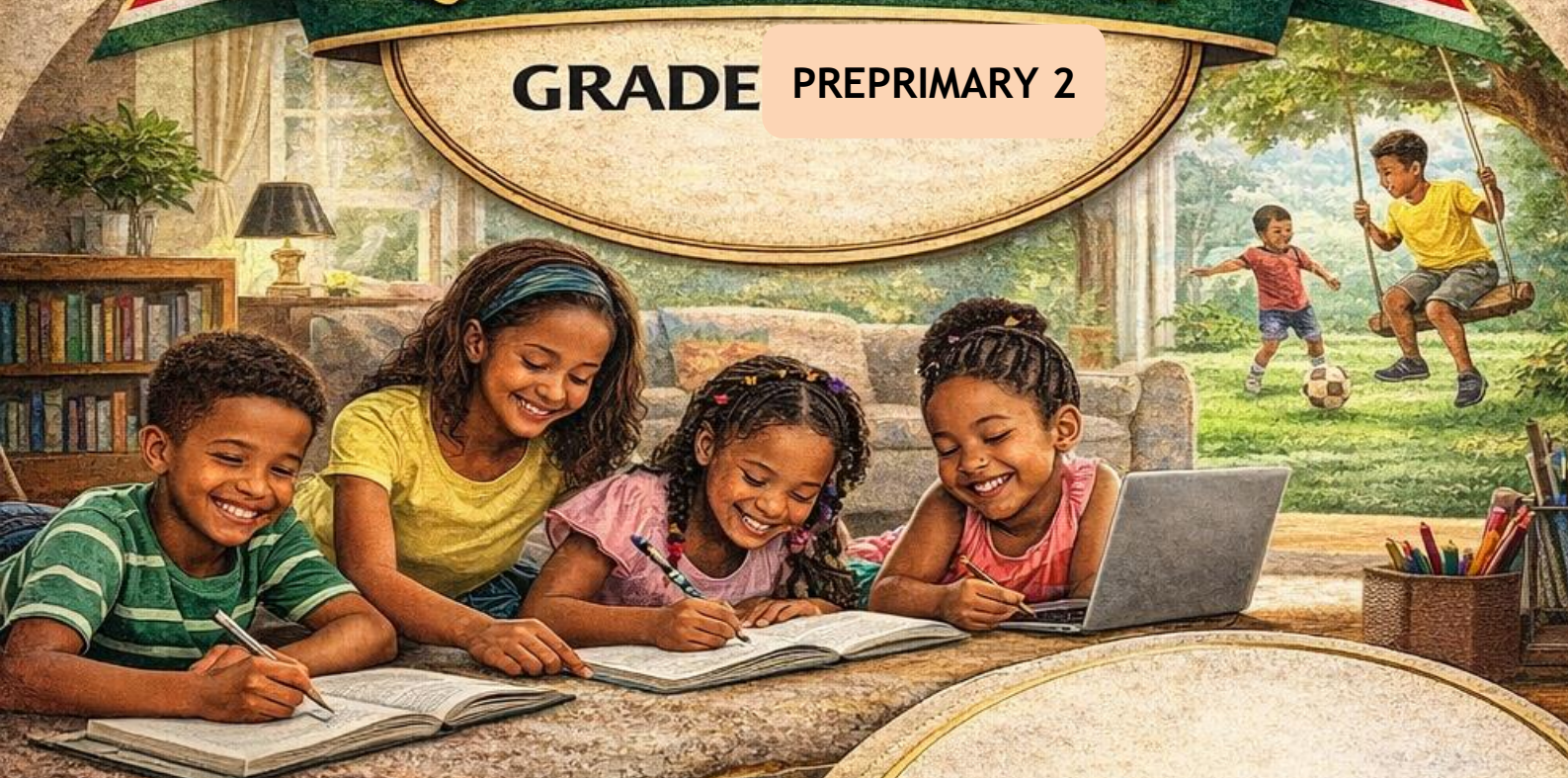
COMPETENCE-BASED EDUCATION CBE

KENYA EARLY YEAR EDUCATION ASSESSMENT

APRIL HOLIDAY ASSIGNMENT 2026

QUESTION BOOKLET

GRADE PREPRIMARY 2



- MATHEMATICS
- ENGLISH
- KISWAHILI
- IRE
- CRE
- ENVIRONMENTAL
- CREATIVE ARTS

LEARNERS NAME: _____

SCHOOL: _____



AUTHORS: COMPETENCE KENYA EDUCATION GROUP

Empowering Kenya's Young Learners with Excellence!


NAME: _____ ASSESSMENT NUMBER: _____

SCHOOL: _____ DATE: _____

Exceeding Expectation	Meeting Expectation	Approaching Expectation	Below Expectation	Total Score (%)

MATHEMATICS ACTIVITIES
TIME: 2 HOURS

1. Count and write (2.5 mks)



2. Fill in the missing numbers (5 mks)

5, 4, _____, _____, 1, 0

10, 20, _____ 40, _____, 60

5, 10, _____, _____ 25, 30

34, 35, _____ 37, _____, 39, 40

43, 44, _____ 46, _____ 48

3. Draw values (4 mks)

7: _____

9: _____

5: _____

6: _____

4. Place values (5 mks)

4 Tens = _____

_____ = 2 Tens 5 Ones

63 = _____ Tens _____ Ones

= _____ Tens _____ Ones

= _____ Tens _____ Ones

5. Write in words (6 mks)

32 : _____


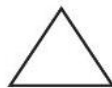
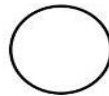
90 : _____

71 : _____

18 : _____

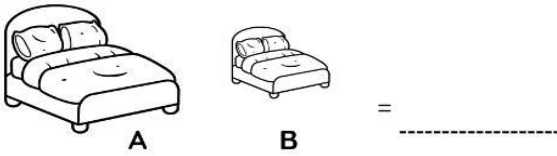
15 : _____

6. Name the shapes and lines (10 mks)



7. Answer correctly (3 mks)

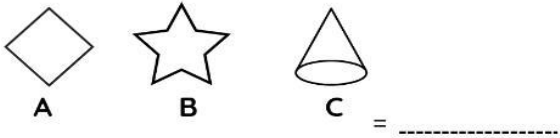
Which one is smaller



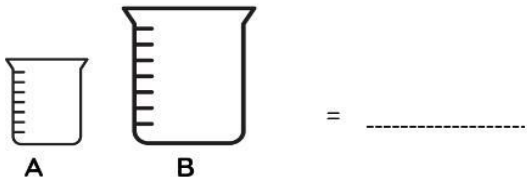
Which one is a straight line



Which one is a cone



Which one holds more, A or B?



How many months make a year _____

A week has _____ days

8. Work out (3.5 mks)

Six plus three equals to _____

Subtract 8 from 19 = _____

Three sheep have _____ legs

Caleb had four apples and his sister Christine had eleven oranges. how many fruits did they have altogether?

= _____

Moses had fourteen bananas, he ate five. How many bananas did he have left?

= _____

_____ is the fourth month of the year

Two girls have _____ fingers?

9. Work out (6 mks)

$16 + 2 = \text{_____}$

$2 + 8 + 0 = \text{_____}$

$10 - 3 - 1 = \text{_____}$

$10 + 4 - 2 = \text{_____}$

$$\begin{array}{r} 83 \\ + 60 \\ \hline \end{array}$$

$$\begin{array}{r} 74 \\ + 12 \\ \hline \end{array}$$

$5 - 2 = \text{_____}$

$9 - 7 = \text{_____}$

$14 - 4 = \text{_____}$

$$\begin{array}{r} 33 \\ - 10 \\ \hline \end{array}$$

$$\begin{array}{r} 27 \\ - 12 \\ \hline \end{array}$$

10. Fill in the missing number (5 mks)

$4 + \square = 10$

$\square + 2 = 6$

$2 + \square = 10$

$9 - \square = 4$

$7 - \square = 5$

NAME: _____ ASSESSMENT NUMBER: _____

SCHOOL: _____ DATE: _____

Exceeding Expectation	Meeting Expectation	Approaching Expectation	Below Expectation	Total Score (%)

LANGUAGE ACTIVITIES

TIME: 2 HOURS

WRITING AND READING

1. Dictation (6mks)

1. _____ 2. _____
 3. _____ 4. _____
 5. _____ 6. _____
 7. _____ 8. _____
 9. _____ 10. _____

2. Singular - Plurals (8mks)

- boy : _____
 ox : _____
 _____ : children
 _____ : sheep
 knife : _____
 _____ : geese
 baby : _____
 water : _____

3. Fill in the missing letters (5 mks)

- J ___ n ___ ar ___ b ___ sk ___ t
 fr ___ nd m ___ th ___ r
 d ___ ct ___ r sch ___ l
 Th ___ sd ___ y m ___ ng ___
 k ___ tt ___ n ___ ppl ___

5. Write action words (3 mks)

- play _____
 run _____
 cut _____
 jump _____
 swim _____
 eat _____

6. Fill using is , am or are (3 mks)

- I _____ happy today
 We _____ playing football
 This _____ my best friend
 I _____ going to school
 It _____ cold
 You _____ very tall

7. Write the opposites of the underlined words (3mks)

- The snail is slow _____
 My dog is big _____
 That towel is wet _____
 This pilow is soft _____
 She is happy today _____
 He walked up the stairs _____

8. Circle the odd one out (1.5 mk)

- cow sheep lion pig cat
 bed bread chair table stool
 cup nose leg toe eye

9. Make words (5mks)

br :

ow :

ay :

silent gh :

silent k :

ee :

10. Make a longer word (2.5 mks)

school + bus

foot + ball

sun + flower

bed + room

tooth + brush

11. Fill in with 'a' or 'an' (3mks)

..... ball elephant

..... apple banana

..... rabbit orange

12. Write well (2mks)

cilpen :

werofl :

ssdre :

eetr :


13. Circle the correct spelling (2mks)

 ieight eight eghit

 watch wathc wahtc

14. Where are they? (2 mks)

(Use the words in the box to fill in the gaps)



infront on in between

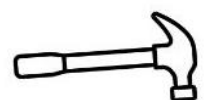
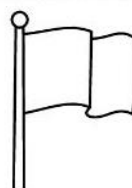

The bird is the roof

The dog is of the house

The cat is the house

The duck is
the house and the tree

15. Name the pictures (4mks)



NAME: _____ ASSESSMENT NUMBER: _____

SCHOOL: _____ DATE: _____

Exceeding Expectation	Meeting Expectation	Approaching Expectation	Below Expectation	Total Score (%)

INTEGRATED ACTIVITIES

TIME: 2 HOURS

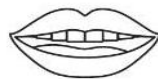
ENVIRONMENTAL ACTIVITIES

Answer correctly (19 mks)

- Name two fruits we eat
.....
- Fish give us
- Name 2 domestic animals
.....,
- A treats people but a takes care of them.
- We use and to wash our hands
- We hear with our
- A gives us eggs and meat
- We must wash our after visiting the toilet. (legs, hands)
- Most leaves are in colour
- The most beautiful part of a plant is the (root, flower)
- We eat the stem of a (sugarcane or mango)
.....
- We eat the leaves of and
- We eat the seeds of and

- When the sun is shining we say its (cloudy, sunny)
- A ripe apple is in colour.
- Name 2 wild animals
.....,
- A new born baby has no (nose, teeth)
-and are fruits with many seeds
- Name two clothes we wear
.....and

20.Name the parts of the body (2 mks)
(mouth, knee, eyes nose,)



21.Fill in the table. (5 mks)

animal	baby	home
cow		
cat		
lion		
dog		
duck		

22. Name the weather (2 mks)









23. Name the farm tools (2 mks)

(rake, wheelbarrow, axe, spade)











CREATIVE ARTS


1. Draw the pictures (4 mks)



tree



cat

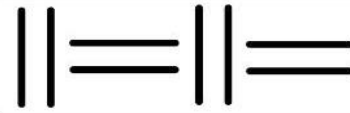


ball

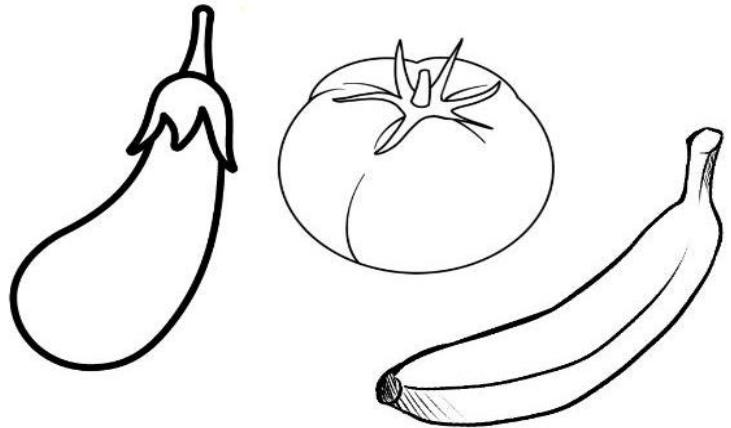


house

2. Complete the pattern. (3 mks)




3. Colour using correct colour (3mks)



RELIGIOUS ACTIVITIES

Answer correctly (10 mks)

- created us.
- Who built an ark?
(Moses, Noah)
- David killed (Goliath, Jacob)
- God created Adam and
(Ruth, Eve)
- Joseph hadbrothers (10, 11)
- Jesus died on the (cross, tree)
- and
were the parents of Jesus
- Name two things that God created
..... and
- This is a 
(Church, Bible)
- Who saw a burning bush
(Moses, Joseph)



JINA: _____ NAMBARI YA TATHMINI: _____

SHULE: _____ TAREHE: _____

SHUGHULI ZA KISWAHILI

MUDA: SAA 1 DAKIKA 40

1. Imla (Alama 6)

2. Jaza silabi (Alama 5)

ba _____ bi bo _____
 fa _____ fi _____ fu
 ha he _____ ho _____
 _____ me _____ mo mu
 _____ _____ zi zo zu

3. Unda maneno (Alama 5)

ma + ma = _____
 ba + bu = _____
 ja + ni = _____
 ku + ni = _____
 da + mu = _____

4. Andika Tarakimu (Alama 5)

- 1 _____
- 2 _____
- 3 _____
- 4 _____
- 5 _____

5. Soma picha hizi (Alama 13)



6. Andika Jina (Alama 6)

(rula, chupa, mti, yai, kalamu, kitabu)

